




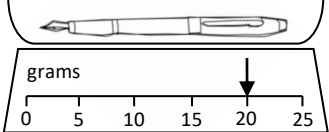
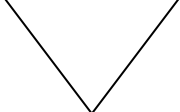

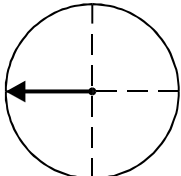


Name: _____

Date: _____

Class/Group: _____

A: Number and Place Value		B: Fractions and Measure		C: Measure and Geometry	
1. What is the missing number? 66 67 68 69 <input type="text"/>	1:1	11. Draw one line to split the shape into 2 halves. 	1:11	16. I put on pyjamas _____ I get into bed. a. before b. after	1:16 
2. What is the missing number? 5 10 15 20 <input type="text"/>	1:2				
3. What number is one less than 50?	1:3	12. Circle a quarter (¼) of the balls. 	1:12	17. Is Monday is the 1 st day of the week, what day is the 3 rd day of the week? a. Tuesday b. Wednesday c. Friday	1:17
4. Pat has 8 sweets. Sam has 5. Who has the least ?	1:4				
5. Write this number in words: 16	1:5	13. Which is heaviest ? 	1:13	18. Draw the hands to show: Half past eight	1:18 
6. What symbol is missing? 3 <input type="text"/> 9 = 12	1:6				
7. What is the missing number? 12 + 8 = <input type="text"/>	1:7	14. How heavy is the pen? 	1:14	19. What is this shape? a. square b. triangle c. circle	1:19 
8. 9 + 17 =	1:8				
9. What is the missing number? 17 = <input type="text"/> + 6	1:9	15. How much altogether? 	1:15	20. The arrow points: a. left b. down c. right	1:20 
10. 4 children each have 4 pens. How many pens do they have altogether?	1:10				
Total (A)		Total (B)		Total (C)	
Test Total (A+B+C)		R (0-7)	Y (8-15)	G (16-20)	