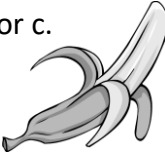


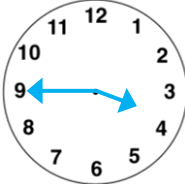


Name: _____

Date: _____

Class/Group: _____

A: Place Value, Add and Subtract		B: Multiply, Divide and Fractions		C: Measure and Geometry	
1. What is the missing number? 0 2 4 6 <input type="text"/> 10 12	2:1 8	11. $35 \div 5 =$	2:11 7	21. Estimate the weight of a banana. Write a, b or c. a. about 15g b. about 150g c. about 15kg	2:17 b
2. What is the value of the 4 in this number? 49	2:2 40	12. Which are the odd numbers? 3 6 9 12	2:11 3, 9		
3. What number is labelled? 	2:3 16	13. What symbol is missing? $4 \square 6 = 24$	2:12 x		
4. Which numbers are > 15 ? 12 14 16 18	2:4 16, 18	14. What symbol is missing? $30 \div 6 \square 5$	2:12 =	22. How many ten pence (10p) coins are the same value as a fifty pence (50p) coin? 	2:19 5
5. Write this number in numerals. fifty three	2:5 53	15. Is this true? Write 'yes' or 'no'. $10 \div 5 = 5 \div 10$	2:13 No	23. Katie has sixty pence (60p). She spends forty-five pence (45p). How much money does she have left?	2:20 15p
6. There are 30 children in a class. 12 are girls. How many are boys?	2:6 18	16. 4 children share 32 sweets. How many sweets does each child get?	2:14 8		
7. $20 - 7 =$	2:7 13	17. 4 teams enter a 7-a-side contest. How many players are in the contest?	2:14 28	24. Which is longest? Write a, b, or c. a. an hour b. 80 minutes c. quarter of an hour	2:21 b
8. $58 - 10 =$	2:8 48	18. Write the fraction one half in numerals.	2:15 $\frac{1}{2}$		
9. Is this true? Write 'yes' or 'no'. $17 + 18 = 18 + 17$	2:9 Yes	19. How many quarters are in 1 whole ones?	2:15 8	25. Draw the hands to show Quarter to four. 	2:22 Correct hands drawn
10. Use $65 + 18 = 83$ to help find: $83 - 18 = \square$	2:10 65	20. What is $\frac{1}{2}$ of 14 ?	2:16 7		
Total (A)		Total (B)		Total (C)	
Test Total (A+B+C)		R (0-9)	Y (10-19)	G (20-25)	