








Name: _____

Date: _____

Class/Group: _____

A: Place Value, Add and Subtract		B: Multiply, Divide and Fractions		C: Measure and Geometry	
1. What is the missing number? 0 3 6 <input type="text"/> 12 15	2:1	11. $2 \times 7 =$	2:11	21. Write <, > or = to make the statement correct.	2:18
2. Circle the 2s that have a value of 2 . 12 28 32 21	2:2	12. Which are the even numbers? 3 6 9 12	2:11	 Height of a cat <input type="text"/> Height of mouse	
3. Draw an arrow to label 19. 	2:3	13. What symbol is missing? $28 \square 4 = 7$	2:12	22. Tick (✓) the shape that has a vertical line of symmetry .	2:23
4. Put these in order, smallest first. 73 3 37 7	2:4	14. What symbol is missing? $11 \times 6 \square 66$	2:12		
5. Write this number in words. 36	2:5	15. Is this true? Write 'yes' or 'no'. $8 \times 3 = 3 \times 8$	2:13	23. Draw the next shape in this pattern:	2:27
6. There are 16 people on a bus. 9 more get on. How many people now?	2:6	16. Bread rolls are sold in packs of 6. If I buy 4 packs, how many rolls do I get?	2:14		
7. Use $6 + 4 = 10$ to answer: $60 + \square = 100$	2:7	17. 12 apples are shared. How many people are there if each person gets 3?	2:14	24. Number of boys & girls in Class 1:	2:29
8. $19 + 44 =$	2:8	18. What fraction is shaded? 	2:15	Key: 😊 means 2 pupils	
9. Tick (✓) if true: $4 + 12 = 12 + 4$ <input type="checkbox"/> $33 - 6 = 6 - 33$ <input type="checkbox"/>	2:9	19. Circle three quarters of the strawberries. 	2:15	boys 	
10. Use $65 - 28 = 37$ to help find: $37 + 28 = \square$	2:10	20. Complete the equivalent fractions. $\frac{2}{4} = \frac{\square}{2}$	2:16	girls <input type="text"/>	
				Show 12 girls on the pictogram.	
				25. How many more boys are there than girls?	2:30
Total (A)		Total (B)		Total (C)	
Test Total (A+B+C)		R (0-9)	Y (10-19)	G (20-25)	