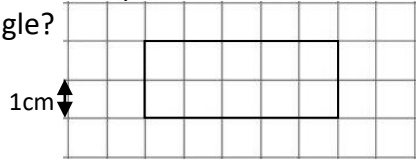


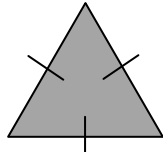


Name: _____

Date: _____

Class/Group: _____

A: Place Value, Add and Subtract		B: Multiply, Divide and Fractions		C: Measure and Geometry	
1. What is the missing number? 18 27 36 <input type="text"/> 54	4:1	11. $66 \div 6 =$	4:9	21. There are 650 millilitres of liquid in a jug. How much more liquid needs to be added to make 1 litre?	4:19
2. What is the missing number? 49 <input type="text"/> 63 70 77	4:1	12. Two factors of 32 add up to 33. What are they?	4:10		
3. What is 1,000 more than 2,350?	4:2	13. $314 \times 7 =$	4:11	22. What is the perimeter of this rectangle? 	4:20
4. Round this number to the nearest 10: 3,275	4:2	14. In a class of 18 there are 2 girls for every 1 boy. How many are boys?	4:12		
5. What is $2 - 9$?	4:3	15. $\frac{?}{3} = \frac{5}{15}$ 	4:13	23. At lunch, Kirsty has a starter and a main meal. She pays with a £20 note. How much change does she get? <input type="text"/> All Starters £4.95 <input type="text"/> All Mains £9.90	4:21
6. What is the value of the 3 in this number? 3,296	4:4	16. What is the missing number? <input type="text"/> 2.00 2.01 2.02 2.03	4:14		
7. Write the number 67 in Roman numerals.	4:5	17. $\frac{5}{14} + \frac{8}{14}$	4:15	24. How would 6:15pm be shown on a 24 hour digital clock? 	4:22
8. $3,912 + 1,129 =$	4:6	18. Write 0.25 as a fraction.	4:16		
9. Write the sum to check $492 + 210 = 702$: $702 - \square = \square$	4:7	19. $45 \div 10 =$	4:17	25. What is the special name for this type of triangle? 	4:23
10. I have £2. I spend £1.15 then 65p. How much do I have left?	4:8	20. Round 5.6 to the nearest whole number.	4:18		
Total (A)		Total (B)		Total (C)	
Test Total (A+B+C)		R (0-9)	Y (10-19)	G (20-25)	