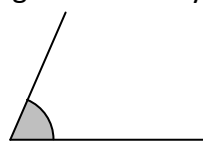
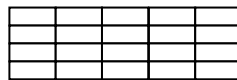
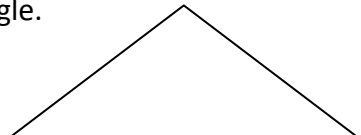
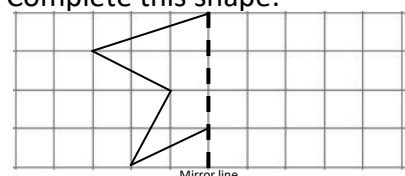
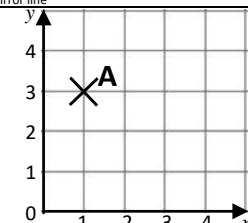


Name: _____

Date: _____

Class/Group: _____

A: Place Value, Add and Subtract		B: Multiply, Divide and Fractions		C: Measure and Geometry	
1. What is the missing number? 14 21 28 <input type="text"/> 42	4:1	11. $9 \times 12 =$	4:9	21. On the back of a film box it says the length of the film is 97 minutes. How long is this in hours and minutes?	4:19
2. What is the missing number? 36 <input type="text"/> 48 54 60	4:1	12. Complete the sum that is equal to 36×7 : $3 \times$ <input type="text"/> $\times 7$	4:10		
3. Round this number to the nearest 10: 5,731	4:2	13. $68 \times 4 =$	4:11	22. What name is given to this type of angle? 	4:24
4. Round this number to the nearest 100: 3,275	4:2	14. One wooden block is 4cm tall. If 14 blocks are piled up, how tall are they?	4:12		
5. What is the next number in this sequence: 4, 2, 0, -2, <input type="text"/>	4:3	15. $\frac{?}{5} = \frac{4}{20}$ 	4:13	23. Draw all the lines of symmetry on this triangle. 	4:25
6. Write < or > to make this correct: 3,948 <input type="text"/> 2,817	4:4	16. When I divide an amount by 100, what fraction of the amount do I have?	4:14		
7. What number does this Roman Numeral represent? XC	4:5	17. $\frac{14}{13} - \frac{5}{13}$	4:15	24. Complete this shape: 	4:26
8. $2,725 - 834 =$	4:6	18. Write $\frac{7}{10}$ as a decimal number.	4:16		
9. Estimate the answer to: $6,504 + 4,478$	4:7	19. What is the value of the 9 in: 3.91	4:17	25. What are the co-ordinates of the point labelled A? 	4:27
10. Sarah had £65. She bought a £28 dress and a £17 bag. How much left?	4:8	20. A log is 6 metres long. It is cut into quarters. How long is each piece?	4:18		
Total (A)		Total (B)		Total (C)	
Test Total (A+B+C)		R (0-9)	Y (10-19)	G (20-25)	