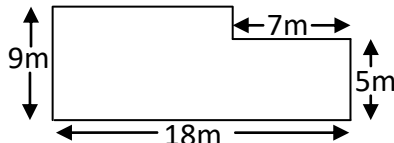




Name: \_\_\_\_\_

Date: \_\_\_\_\_

Class/Group: \_\_\_\_\_

A: Place Value, Add and Subtract		B: Multiply, Divide and Fractions		C: Measure and Problem Solving	
1. What is the value of the <b>3</b> in this number? 2,934,765	5:1	11. Which is a <b>common factor</b> of 18 and 36? 3 4 5 8 10	5:8	21. Ben was 0.75 metres tall. Next time he got measured he had grown by $\frac{2}{10}$ of a metre. How tall is he now?	5:19
2. Write <b>two hundred and twelve thousand, five hundred</b> in digits.	5:1	12. Give two <b>prime numbers</b> between 10 and 20.	5:9	22. How many <b>grams</b> are there in <b>6.35 kilograms</b> ?	5:20
3. Round 163,824 to the <b>nearest thousand</b> .	5:2	13. $3,472 \div 7$	5:10		
4. What is the missing number? 2,465 2,365 <input type="text"/> 2,165	5:2	14. $321.5 \times 100$	5:11	23. Calculate the <b>perimeter</b> of this field. 	5:21
5. What temperature is 12 degrees less than 2 degrees Celsius?	5:3	15. What is $4^2$ ?	5:12		
6. What number is represented by these Roman Numerals? <b>DLXXV</b>	5:4	16. $\frac{2}{3} + \frac{2}{9} =$	5:13	24. Use the glass to estimate the capacity of this jug.  a. 250 ml. b. 300 ml. c. 750 ml.	5:22
7. $10,750 - 2,925 =$	5:5	17. Find an <b>equivalent fraction</b> of $\frac{2}{8}$ . 	5:14		
8. $6,495 + 8,912 =$	5:5	18. Write $\frac{13}{5}$ as a <b>mixed number</b> .	5:15	25. Sarah starts watching a film at <b>10.15am</b> . The film is <b>145 minutes</b> long. What time does Sarah finish watching the film?	5:23
9. Complete this sum without written working. $7,800 + 2,500 =$	5:6	19. $\frac{3}{4} \times 20 =$	5:16		
10. I buy 2 CDs costing £5.90 each. How much change do I get from £15?	5:7	20. Round 4.51 to 1 decimal place.	5:17		
Total (A)		Total (B)		Total (C)	
Test Total (A+B+C)		R (0-9)	Y (10-19)		G (20-25)