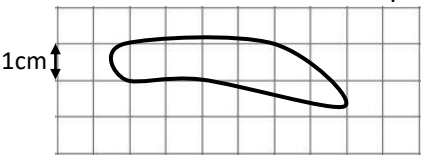
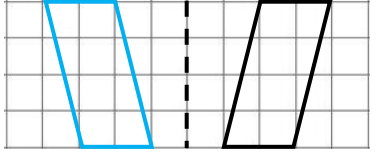
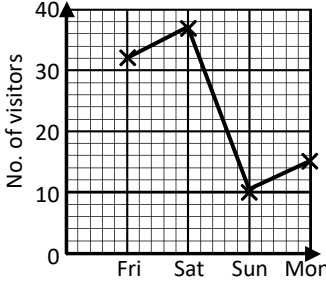



Name: _____

Date: _____

Class/Group: _____

A: Place Value, Add and Subtract		B: Multiply, Divide and Fractions		C: Measure, Geometry and Statistics	
1. What is the value of the 2 in this number? 2,934,765	5:1 2,000,000 (million)	11. Write all of the factors of 18.	5:8 1,2,3,6,9,18	21. If 1 kilogram is approximately 2.2 pounds, about how many kilograms are equal to 8.8 pounds?	5:20 4
2. Put these in order, smallest first: 212,285 32,956 110,000 85,253	5:1 32..., 85..., 110..., 212...	12. Which of the following are prime numbers ? 3 4 7 15 18	5:9 3, 7	22. Estimate the area of this shape: 	5:21 6 or 7
3. Round 163,824 to the nearest ten thousand .	5:2 160,000	13. 1,016 x 8	5:10 8,128		
4. What is the missing number? 117,250 107,250 <input type="text"/> 87,250	5:2 97,250	14. 9.2 ÷ 100	5:11 0.092	23. Reflect the shape in the mirror line. 	5:28 Shape drawn
5. Put these in order, smallest first: -3, 1, -5, 0, 4, -2	5:3 -5,-3,-2,0,1,4	15. What is 3³ ?	5:12 27		
6. What year is represented by these Roman Numerals? MCMXCV	5:4 1995	16. Put these in order, smallest first: $\frac{3}{5}$ $\frac{7}{10}$ $\frac{8}{15}$	5:13 $\frac{8}{15}$ $\frac{3}{5}$ $\frac{7}{10}$	24. Customers over a long weekend: How many customers were there on the busiest day? 	5:29 37
7. 112,498 - 48,745 =	5:5 63,753	17. Find an equivalent fraction of $\frac{2}{4}$. 	5:14 $\frac{1}{2}$ or $\frac{4}{8}$		
8. 34,857 + 79,384 =	5:5 114,241	18. Write the answer as a mixed number . $\frac{7}{8} + \frac{11}{8}$	5:15 $2\frac{2}{8}$		
9. Complete this sum without written working. 15,200 - 2,050 =	5:6 13,150	19. $\frac{2}{9} \times 27 =$	5:16 6		
10. The temp. was -4°C. It rose by 9°C, then dropped by 4°C. What is it now?	5:7 1°C	20. Write 0.8 as a fraction.	5:17 $\frac{8}{10}$ or $\frac{4}{5}$	25. How many customers were there in total over the long weekend?	5:29 94
Total (A)		Total (B)		Total (C)	
Test Total (A+B+C)		R (0-9)	Y (10-19)		G (20-25)